

Name : \_\_\_\_\_

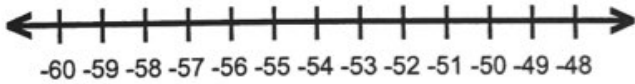
Score : \_\_\_\_\_

Teacher : \_\_\_\_\_

Date : \_\_\_\_\_

### Solve and Graph the Inequalities (1)

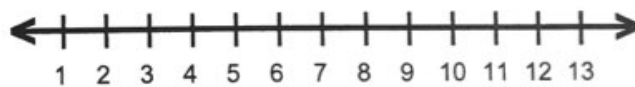
1)  $-11 \leq \frac{y}{5}$



6)  $-4q < -52$



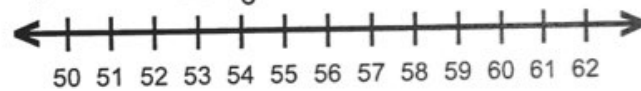
2)  $2c \geq 16$



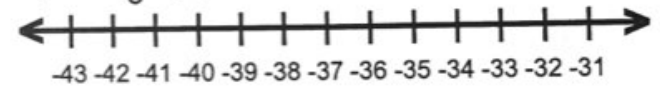
7)  $-30 > 3p$



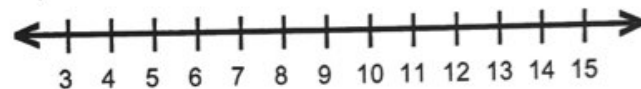
3)  $10 \geq \frac{h}{6}$



8)  $\frac{v}{3} \geq -12$



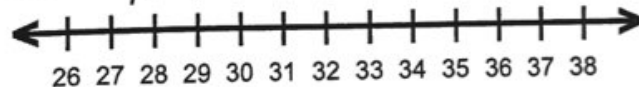
4)  $52 > 4a$



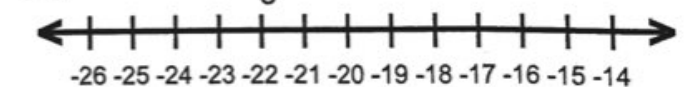
9)  $\frac{k}{2} \leq 11$



5)  $\frac{s}{7} < 5$



10)  $-8 < \frac{d}{3}$



Name : \_\_\_\_\_

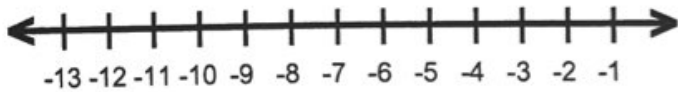
Score : \_\_\_\_\_

Teacher : \_\_\_\_\_

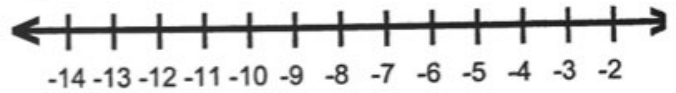
Date : \_\_\_\_\_

### Solve and Graph the Inequalities (4)

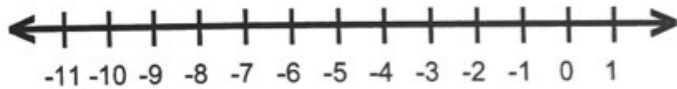
1)  $-27 < 5y + 3$




6)  $17 \geq 5 - 2a$



2)  $-3z + 5 \geq 26$



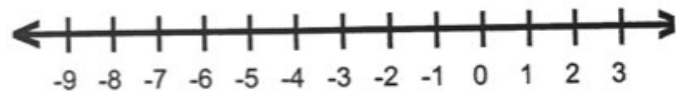
7)  $10 > -5 + \frac{h}{6}$



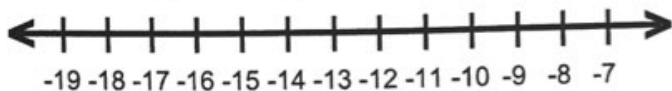
3)  $-2 + \frac{f}{6} < 11$



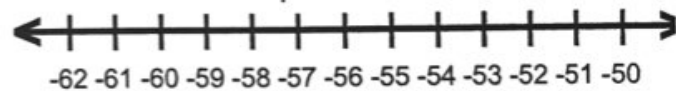
8)  $-13 \leq 4c + 3$



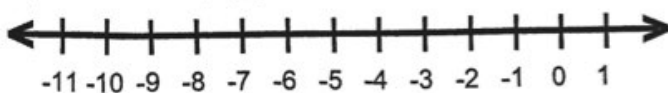
4)  $-44 \leq 6 + 5g$



9)  $-10 > 3 + \frac{x}{4}$



5)  $4 - 5q \leq 34$



10)  $4 - 2b \geq 26$

